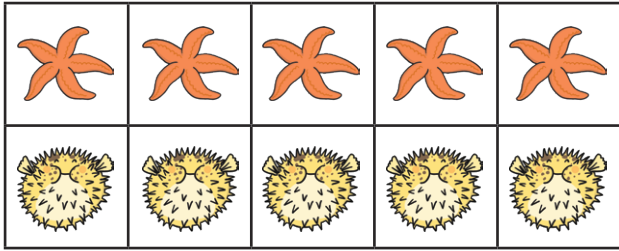




Number Bonds to 10 Ten-Frame Activity




$$\boxed{5} + \boxed{} = \boxed{10}$$




$$\boxed{3} + \boxed{} = \boxed{10}$$




$$\boxed{1} + \boxed{} = \boxed{10}$$



$$\boxed{} + \boxed{} = \boxed{10}$$




$$\boxed{} + \boxed{4} = \boxed{10}$$

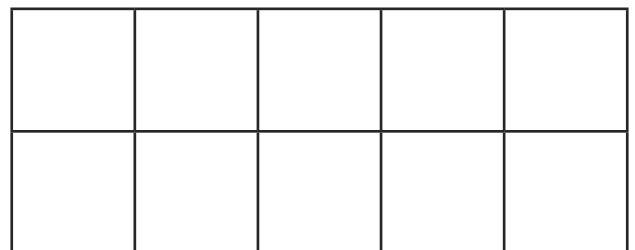


$$\boxed{10} + \boxed{} = \boxed{}$$

Can you create your own?



$$\boxed{} + \boxed{8} = \boxed{}$$



$$\boxed{} + \boxed{} = \boxed{}$$