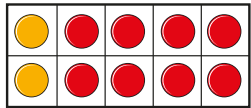
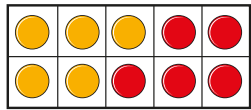


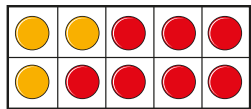
1 Match the ten frames to the number sentences.



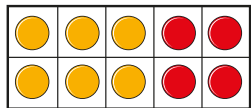
$$3 + 7 = 10$$



$$6 + 4 = 10$$

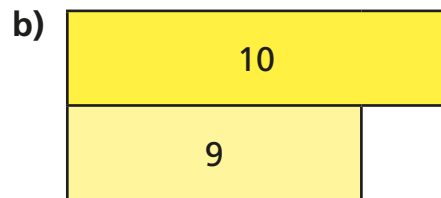
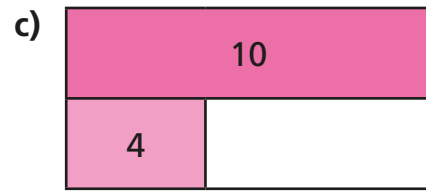
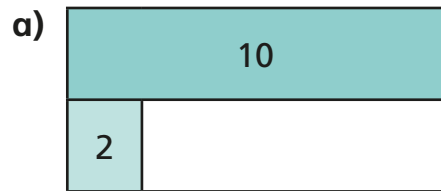


$$2 + 8 = 10$$




$$5 + 5 = 10$$

2 Complete the bar models.




3 10 children can sit at this table.



How many more children can sit down?

4 Sam and Mo have 10 sweets between them.

Sam has 4 sweets.



How many sweets does Mo have?

5 Take 10 cubes.

Give some to your friend.

How many cubes could you each have?

